



SINDHI HIGH SCHOOL, K.K. ROAD BENGALURU -01

WORKSHEET-5 (2023-24)

SUBJECT: ENGLISH



Name: _____

Class: I A/ B/ C

Roll no: _____

Date: 18/3/2024

Marks: 20

Time: 1 hour 10 mins

No. of sides printed: 4

SECTION - A READING

1) Read the following passage carefully:

The New Bicycle

Gita has a new bicycle. It is bright pink and shiny. It was a gift from her uncle. He hid it behind a bush to surprise her. When Gita looked behind the bush and saw the bicycle, she jumped with joy. It was just what she wanted. She gave her uncle a big hug. She loves her new bicycle, and she loves her uncle.

(1x5=5)

A) Answer the following:

1. What colour is the bicycle?

2. Who gifted Gita a bicycle?

3. Where was the bicycle hidden?

4. What did Gita do when she saw the bicycle?

5. Did Gita have a new bicycle or a new bag?

SECTION - B CREATIVE WRITING AND GRAMMAR

B) Rearran

A) Write 3 sentences on "My Favourite fruit":

(3M)

GRAMMAR

A) Look at the picture and write the correct preposition in the blank:(1x3=3)


1. The teddy is _____ the box.



2. The car is _____ the trees.



3. The cat is _____ the table.



B) Rearrange the words to make meaningful sentences:

(1x3=3)

1. milk / gives / us / cow

2. cold / ice cream / is

3. the thief / arrested / the policeman

SECTION C – LITERATURE

A) Answer the following:

(1x3=3)

1. What did Champa put in her basket?

2. How was the beach?

3. Who bumped into an orange tree?

B) State whether the following statements are true or false:

(1x2=2)

1. Children made and put signs on the beach. _____

2. The monkey took the guavas. _____

C) Make a sentence for the given word:

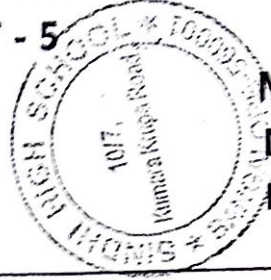
(1x1=1)

1. Beach:



SINDH HIGH SCHOOL, BENGALURU
SUBJECT : HINDI (ADDITIONAL LANG.)

WORKSHEET - 5



MARKS: 20

Date: 19/3/24

ROLL NO. _____

CLASS: 1 A / B / C

No. of printed sides: 3

NAME: _____

[I] Read the given passage and choose the correct answer :

1 x 5 = 5

प्रज्ञा पहली कक्षा की छात्रा है।
वह बहुत परिश्रमी है।
उसके पिता जी श्रमिक हैं।
वह सबकी आज्ञा मानती है।
क्षिति उसकी मित्र है।
वह विज्ञान पढ़ती है।
क्षिति को चित्र बनाना पसंद है।
सभी शिक्षक क्षिति से खुश रहते हैं।

1. प्रज्ञा कौन सी कक्षा की छात्रा है?

पहली

दूसरी

तीसरी

चौथी

2. प्रज्ञा कैसी लड़की है ?

आलसी

परिश्रमी

गरीब

शिक्षक

3. वह किस की आज्ञा मानती है?

किसी की भी नहीं

माता की

पिता की

सब की

4. प्रज्ञा की मित्र कौन है?

सब

क्षिति

कोई नहीं

रीती

5. सभी शिक्षक किस से खुश रहते हैं?

प्रज्ञा से



क्षिति से

पिता जी से

सभी बच्चों से

[III] IDENTIFY THE PICTURES AND WRITE THEIR NAMES IN HINDI

चित्र पहचानकर उनके नाम हिंदी में लिखिए



Colour the pic-
रा भरिए-
लाल

[III] Change the gender :

लिंग बदलकर लिखिए -

$\frac{1}{2} \times 4 = 2$

1. लड़का - _____

2. माता - _____

3. श्रीमान - _____

4. मामा - _____

[IV] Change into plurals :

वचन बदलकर लिखिए -

$\frac{1}{2} \times 4 = 2$

1. बूँद - _____

2. गुब्बारा - _____

3. बस्ता - _____

4. बच्चा - _____

[V] Write the opposite words:

विलोम शब्द लिखिए-

$\frac{1}{2} \times 4 = 2$

1. गाँव - _____

2. पसंद - _____

3. अपने - _____

4. अच्छा - _____

[VI] Write rhyming words:

तुकवाले शब्द लिखिए -

$\frac{1}{2} \times 4 = 2$

1. पूँछ - _____

2. चित्र - _____

3. पक्का - _____

4. बच्चा - _____

$$\frac{1}{2} \times 4 = 2$$

Colour the pictures :

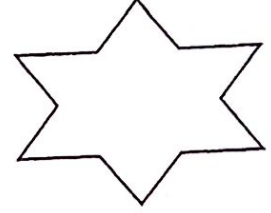
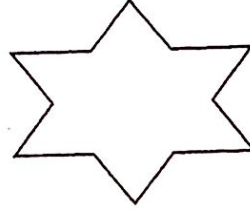


रंग भरिए-

लाल

हरा

नीला

पीला



$$\frac{1}{2} \times 2 = 1$$

[VIII] Circle the correct word :

सही शब्द पर गोला लगाओ -

1. आँख

आँखँ

आखँ

2. प्रातः

प्राःत

प्राःतः



SINDHI HIGH SCHOOL, K K ROAD, BENGALURU

Worksheet-5 (2023-24)

Subject: II Language Kannada

N0 of printed sides:3

Class: I -Sec: A B C

Marks:20

Name: _____

Reading Time: 8am to 8.10

Date: 28 / 3 / 24

Writing Time: 8.10 to 9.10

I. Write the opposites of :-

$\frac{1}{2} \times 4 = 2$

೧. ಹಿತ x _____

೨. ಸಿಹಿ x _____

೩. ಹೋಗು x _____

೪. ನಗು x _____

II. Identify the picture and circle the correct word.

$\frac{1}{2} \times 4 = 2$



ಬೆಕ್ಕು ನಾಯಿ



ರಸ್ತೆ ಬೆಟ್ಟ



ಕಬ್ಬು ಬಾಳೆಹಣ್ಣು



ಹಲ್ಲು ಕಿವಿ

III.Circle (ಜ್ಞ) and ottashkara (ಕೃ) words from the given sentences.

$\frac{1}{2} \times 4 = 2$

೧.ಅಜ್ಜಿಗೆ ಮಜ್ಜಿಗೆ ಎಂದರೆ ಅಚ್ಚುಮೆಚ್ಚು.

೨.ಚಿಕ್ಕಪ್ಪನು ತಕ್ಕಡಿಯಲ್ಲಿ ಹಣ್ಣನ್ನು ತೂಗಿದನು.

IV. Pick sajatiya and vijatiya ottakshara words and write in the given box.

$\frac{1}{2} \times 6 = 3$

(ಗಡ್ಡೆ, ಸತ್ಯ, ಬೆಟ್ಟ, ರತ್ನ, ರಕ್ತ, ಚಕ್ಕುಲಿ)

ಸಜಾತೀಯ

ವಿಜಾತೀಯ

--	--

V. Match the following genders.

$\frac{1}{2} \times 4 = 2$

೧. ತಾಯಿ ಸೋದರ
೨. ಮಗ ಅಣ್ಣ
೩. ಅಕ್ಕ ತಂದೆ
೪. ಸೋದರಿ ಮಗಳು

VI. Write the plurals of:-

$\frac{1}{2} \times 6 = 3$

ಉದಾಹರಣೆ:- ಗಿಡ: ಗಿಡಗಳು

೧. ಮರ: _____ ೨. ಶಾಲೆ: _____
೩. ನದಿ: _____ ೪. ಮನೆ: _____
೫. ಆನೆ: _____ ೬. ಇಲಿ: _____

VII. Choose the letters from the grid make four meaningful words.

$\frac{1}{2} \times 4 = 2$

ಳ	ಸ್	ಪ್ಪ	ಹ
ನ	ಟ್ಟ	ಬೆ	ದ್ದ
ಅ	ಬ	ಉ	ಕ್ಕ
ಜ್ಜ	ಗ	ಡ್ಡ	ಚ್ಚ

VIII. Choose the correct word and complete the given sentence.

5 of 5

೧. ಮೊಲದ ಹಾಟಿ _____ ಚೆನ್ನಾಯಿತು. (ಗಿಡದ, ಎಲೆಯು)

೨. ಮೊಲದ ಕಿವಿಗಳು _____ ದಾಸಿಯೆ. (ಮೊಟ್ಟೆ, ಚಿಕ್ಕ)

೩. _____ ಬಾಲ ಮೊಟ್ಟೆಯು. (ಮೊಲದ ಸಿಂಹದ)

೪. ಮೊಲವು _____ ಬಳಿ ಅಡುಕುತ್ತದೆ. (ಪುನಃನಿರಿಸಿ, ನದಿಯು)

IX. Complete the passage with help of the given words.

5 of 5

(ಮೊಲದ, ಅಳಿಲಿನ, ಬಾಲ, ಜೊತೆಕಾಡಿ)

ಒಂದು ಕೊಠಡಿ _____ ಮೊಲ ಕುಳಿತು ಅ ಕೊಠಡಿಯು _____
ತುಂಬಾ ಶಾಂತವಿತ್ತು. ಒಂದು ದಿನ _____ ಕುಣಿಯುತ್ತಾ ಅಲ್ಲಿಗೆ
ಬಂದಿತು. ಆ ಕೊಠಡಿಯು ಬಾಲವನ್ನು, ಕಿಡಿಯು _____ ಯಂತೆ
ಬೀಜತೊಡಗಿತ್ತು. ಅಗೆ ಕೊಠಡಿಗೆ ಕಚ್ಚುಳಿಯಾಯಿತು ಇದರಿಂದ ಅಳಿಲಿಗೆ
ಗಾಬರಿಯಾಯಿತು.



SINDHI HIGH SCHOOL, KK ROAD, BENGALURU.

WORKSHEET - 5. (2023 - 24)

MATHEMATICS

CLASS: 1 A/B/C

NAME: _____

ROLL NO: _____

NO. OF PRINTED SIDES. 4

DATE: 21/03, 2024

TIME: 8:10 TO 9:10

MARKS: 20

1. Add and find the total amount.

(2)

a.  = _____

b.  = _____

2. Find the exchange of these rupee notes.

(2)



3) Ramya goes to a stationery shop and looks at these stationery items. (2)



₹ 56



₹ 30



₹ 42



₹ 35

Calculate the amount to be paid in the following cases.

a) ruler and diary

diary	
ruler	
Total	

b) diary and pouch

diary	
pouch	
Total	

4) Circle any two articles that you can buy exactly for Rs.50. (2)

a)



Rs. 45



Rs. 10



Rs 5



Rs. 10

b)



Rs.25



Rs.40



Rs.30



Rs.25

5) Fill in the blanks.

(3)

a) $2 \times 5 = \underline{\quad}$

b) $\underline{\quad} \times 10 = 30$

c) $3 \times 6 = \underline{\quad}$

d) $8 \times \underline{\quad} = 8$

e) $5 \times 8 = \underline{\quad}$

f) $10 \times \underline{\quad} = 100$

6) Observe the figures and answer.

(2)




a) How many groups?

b) How many in each group?

c) Addition fact.

d) Multiplication fact.



a) How many groups?

b) How many in each group?

c) Addition fact.

d) Multiplication fact.

7) Multiply.

(3)

T O

7

X 2

T O

9

X 2

T O

8

X 3

8) Solve the following problems.

(6)

a) There are 5 apples in a bowl. How many apples will be there in 3 bowls?



Number of apples in a bowl = _____

Number of bowls = _____

Total number of apples = _____

b) A table has 4 legs. How many legs do 10 tables have?



Number of legs in a table = _____

Number of tables = _____

Total number of legs = _____





WORKSHEET-5(2023-24)

SUBJECT: EVS

Name: _____

Date: 26 / 3 / 2024

Class: I A/ B/ C

Marks: 20

Roll no: _____

Time: 1 hr 10 min

No of sides printed: 3

I. Fill in the blanks:

(1*4=4M)

1. The hard part inside the fruit is called _____.
2. The _____ makes food for the plant.
3. We get wool from _____.
4. _____ is the largest animal in the world.

II. Choose the correct answer:

(1/2*4=2M)

1. _____ is a flower.
 a) radish b) hibiscus
2. _____ is a leaf.
 a) spinach b) ginger
3. _____ can be used as medicine.
 a) orange b) tulsi
4. _____ lives in water.
 a) octopus b) horse

III. Circle the odd one out:

- 1. Neem, Ginger, Aloe vera, Wheat
- 2. Papaya, Wool, Milk, Egg
- 3. Leaf, Oxygen, Stem, Root
- 4. Fish, Cat, Lion, Parrot

IV. True or False:

(1/2*4=2M)

- 1. Flowers are the most attractive part of a plant : _____
- 2. Stem grows below the soil: _____
- 3. We should love and take care of animals : _____
- 4. Animals that are kept in farms are called pet animals: _____

V. Match the following:

(1*4=4M)

- | | | |
|---------------|-----|-------------|
| 1. Dog | () | a) Flower |
| 2. Horse | () | b) Pet |
| 3. Strawberry | () | c) Domestic |
| 4. Lotus | () | d) Fruit |

VI. Answer the following questions:

(1*3=3M)

Q1. Write about wild animals.

Q2. Who is called the king of the jungle?

23. Write the function of roots.

VII. Draw and give one example for each of the following.

(3M)

Wild Animal	Pet Animal	Animal that live in water

All the Best